



# C2170-051<sup>Q&As</sup>

IBM i2 Analyst's Notebook V8.9

**Pass IBM C2170-051 Exam with 100% Guarantee**

Free Download Real Questions & Answers **PDF** and **VCE** file from:

<https://www.passapply.com/c2170-051.html>

100% Passing Guarantee  
100% Money Back Assurance

Following Questions and Answers are all new published by IBM Official Exam Center

-  **Instant Download** After Purchase
-  **100% Money Back** Guarantee
-  **365 Days** Free Update
-  **800,000+** Satisfied Customers





### QUESTION 1

Attributes are typically displayed on the chart under the item for which it is assigned, but this is not always desirable. An intelligence analyst wants to hide the attributes, but not the item to which it is assigned. This can be accomplished by unchecking the Show on Chart check box for the properties of the:

- A. Attribute Texts.
- B. Attribute Entries.
- C. Attribute Classes.
- D. Attribute Instances.

Correct Answer: C

---

### QUESTION 2

An intelligence analyst has just created a new custom attribute. However, when the analyst inputs the data, only the Attribute Symbol is displayed on the chart and not the data entered. Which of the following actions would allow the data to be displayed?

- A. Change the attribute type to "Number".
- B. Select "Show All" under the View tool bar.
- C. Check the "Value" box under the attribute class properties.
- D. Check the "Show on Chart" box under the attribute class properties.

Correct Answer: C

---

### QUESTION 3

Review the following images:



Row	Source	Destination	Call Duration
2	555 555 1234	123 456 7890	3
3	555 555 1234	123 456 7890	11
4	555 555 1234	123 456 7890	5
5	555 555 1234	123 456 7890	2
6	555 555 1234	123 456 7890	7

In order to have the attribute appear as it does on the link above, how would the attribute need to be added during the Assign Columns step in the Import Specification?



A.

Link	Cards	Attributes
Class	Type	Value
Call Duration	Text	[Call Duration]

B.

Link	Cards	Attributes
Class	Type	Value
Call Duration	Number	[Call Duration]

C.

Link	Cards	Attributes
Class	Type	Value
[Call Duration]	Text	[Call Duration]

D.

Link	Cards	Attributes
Class	Type	Value
[Call Duration]	Number	[Call Duration]

A. Exhibit A

B. Exhibit B

C. Exhibit C

D. Exhibit D

Correct Answer: B

#### QUESTION 4

Find Path allows a user to:



- A. use Google Earth for geospatial analysis.
- B. find a specific route between two items on a chart.
- C. predict a subject movements based on previous activity.predict a subject? movements based on previous activity.
- D. extend the current selection of items on the chart to include entities linked to the selection.

Correct Answer: B

---

#### QUESTION 5

Which of the following can locate matching entities of any type, with identical spellings, but containing spaces, tabs or case differences?

- A. Label Matching
- B. Smart Matching
- C. Previously Linked Matches
- D. Smart Matching Against Selection

Correct Answer: A

---

#### QUESTION 6

The investigator wants to perform a search for "FARADAY" in Analyst\\s Notebook. Which wildcard search will return the desired results?

- A. F?Y
- B. F\*AY
- C. F\*day
- D. FA???

Correct Answer: B

---

#### QUESTION 7

Intelligence has arrived in a number of documents in the UK. A typical example is "Frank Wilson is using the following accounts - 00000012345678, 00000098765432 and 00000071234432". An intelligence analyst has been tasked with creating a chart so that questions such as the following can be answered:

-Who is using 3 or more accounts?

-

Which accounts are being used by 3 or more people?



Which accounts are being used by 3 or more people?

Which of the following chart structures would be able to answer this question using a search?

- A.  
Exhibit A
- B.  
Exhibit B
- C.  
Exhibit C
- D.  
Exhibit D

A.



B.

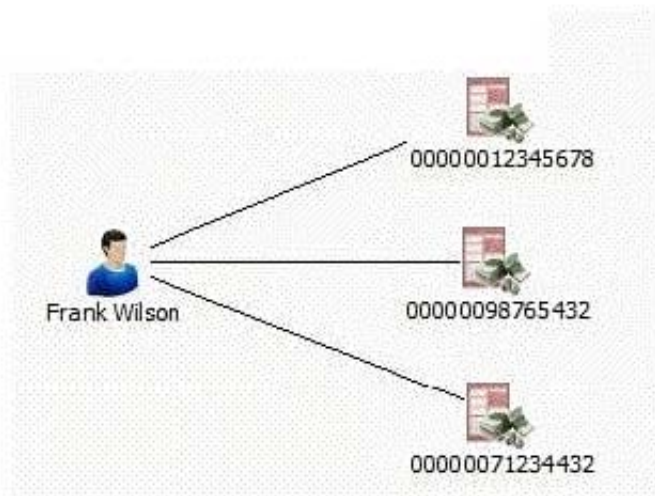




C.



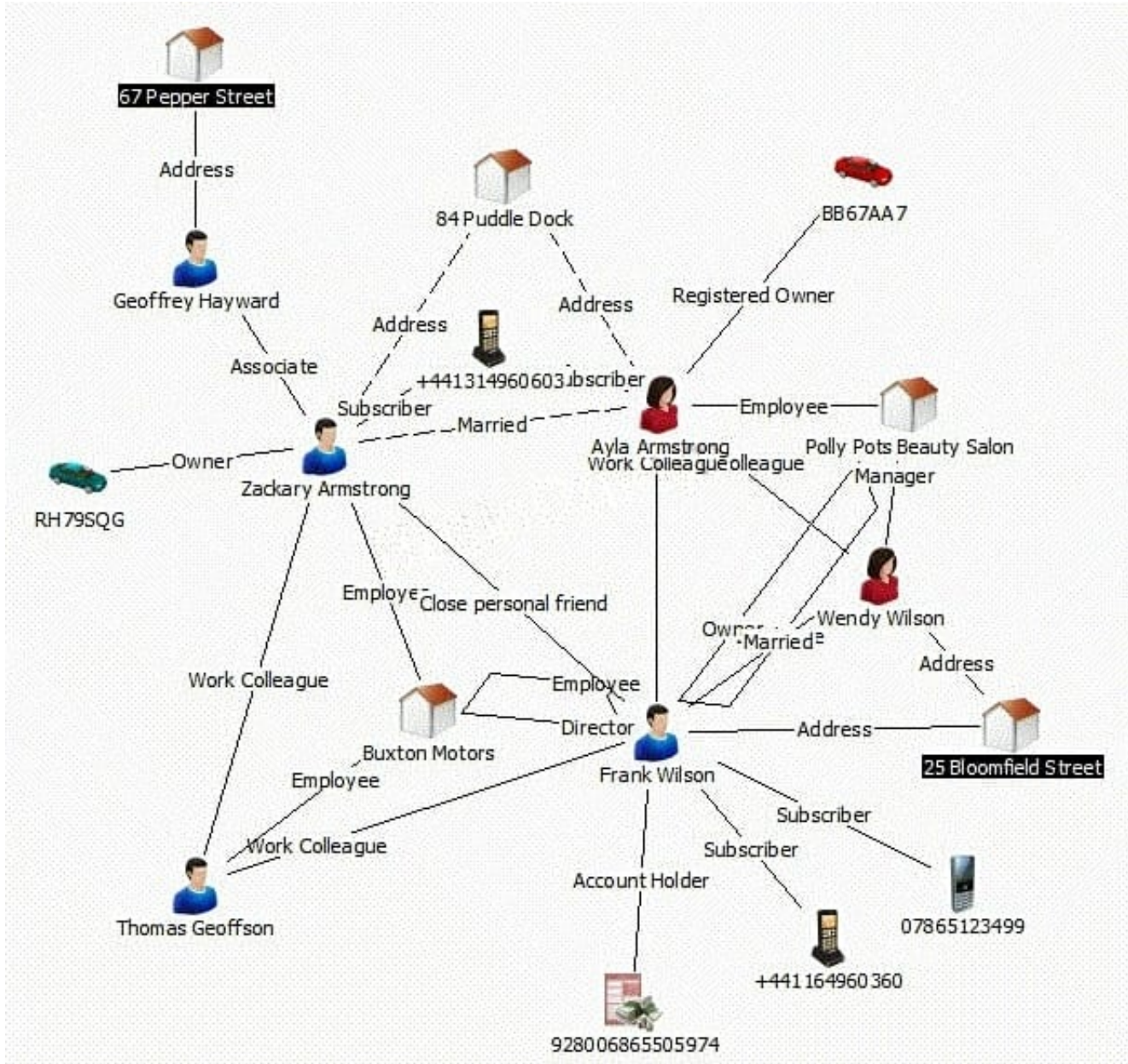
D.



Correct Answer: D

### QUESTION 8

Review the following image from the UK intelligence sources:



Which of the following analysis tools will highlight the shortest string of connections between the two highlighted entities?

- A. Find Path
- B. Find Linked
- C. Highlight Tool
- D. List Linked Items

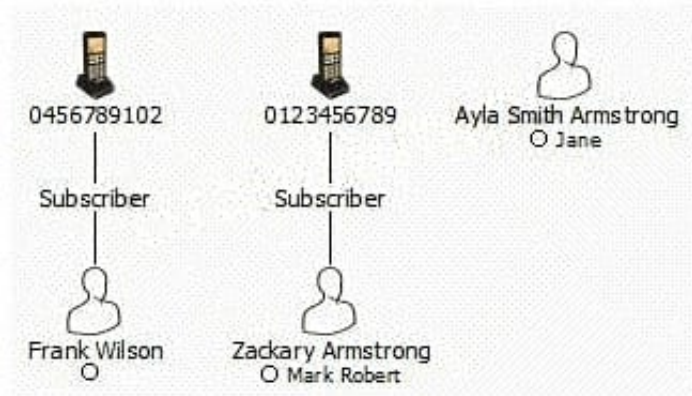
Correct Answer: A

**QUESTION 9**





A researcher in the UK has been tasked with creating a spreadsheet ready to be imported into Analyst's Notebook. The chart required looks like this:



Which of the following spreadsheets is ready for importing, and does not need any spreadsheet formulas or Column Actions to change it in any way?



A.

<b>First Name</b>	Frank	Zackary	Ayla
<b>Middle Name</b>		Mark Robert	Jane
<b>Last Name</b>	Wilson	Armstrong	Smith Armstrong
<b>Date of Birth</b>	08 Nov 60	13 Sep 79	24 Sep 82
<b>Telephone Number</b>	0456789102	0123456789	

B.

<b>Name</b>	<b>Date of Birth</b>	<b>Telephone Number</b>
Frank Wilson	08 Nov 60	0456789102
Zackary Mark Robert Armstrong	13 Sep 79	0123456789
Ayla Jane Smith Armstrong	24 Sep 82	

C.

<b>First Name</b>	<b>Middle Name</b>	<b>Last Name</b>	<b>Date of Birth</b>	<b>Telephone Number</b>
Frank		Wilson	08 Nov 60	0456789102
Zackary	Mark Robert	Armstrong	13 Sep 79	0123456789
Ayla	Jane	Smith Armstrong	24 Sep 82	

D.

<b>Name</b>	Frank Wilson	Zackary Mark Robert Armstrong	Ayla Jane Smith Armstrong
<b>Date of Birth</b>	08 Nov 60	13 Sep 79	24 Sep 82
<b>Telephone Number</b>	0456789102	0123456789	

A. Exhibit A

B. Exhibit B

C. Exhibit C



D. Exhibit D

Correct Answer: C

### QUESTION 10

Which of the following is true when using corners in an association or timeline chart layout?



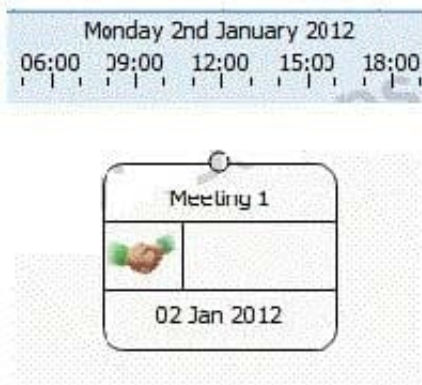
- A. Corners can be added to a Theme Line segment.
- B. Corners can be added to a link between Theme Lines.
- C. When the circle  appears, click to add a corner to a link.
- D. When the cross-hair  appears, click to add a corner to a link.

- A. Exhibit A
- B. Exhibit B
- C. Exhibit C
- D. Exhibit D

Correct Answer: D

#### QUESTION 11

An analyst has created a chart showing certain activities such as meetings. A small part of the chart looks like this: What BEST describes how date and time options are set up for this entity?



- A. Free
- B. Ordered
- C. Sequence
- D. Controlling

Correct Answer: A

#### QUESTION 12

Which of the following features of an entity CANNOT be utilized in a link?



- A. Date
- B. Grades
- C. Identity
- D. Analysis attributes

Correct Answer: C

---

### QUESTION 13

Intelligence has arrived in a number of documents. The documents include lists of all employees of 10 organizations. A typical example is "Frank Wilson works as an accountant for an organization called ABC. He also works as a trainer for an organization called XYZ". An intelligence analyst has been tasked with creating a chart so that questions such as the following, can be answered:

-Who works for ABC as an accountant?

To create the chart, the analyst has to decide how to structure the data. Which of the following example structures would be able to answer this question using a search?

- A. Exhibit A
- B. Exhibit B
- C. Exhibit C
- D. Exhibit D

Correct Answer: D

---

### QUESTION 14

A data column contains phone numbers including parentheses and a dash. For example: (111) 222-3333 Which of the following Column Actions will transform the column of data into numbers only?

- A. Remove Characters
- B. Extract Portion of Text
- C. Replace from Substitution File
- D. Compress Repeated Characters

Correct Answer: A

---

### QUESTION 15

A researcher in the UK has been tasked with creating a spreadsheet ready to be imported into Analyst's Notebook. The chart required looks like this:



Which of the following spreadsheets is ready for importing, and does not need any spreadsheet formulas or Column Actions to change it in any way?



A.

Organization	Number
ABC	0345678910
ABC	00000067678888
DEF	00000088222822
GHI	0333555000

B.

Organization	Telephone Number	Account Number
ABC	0345678910	00000067678888
DEF		00000088222822
GHI	0333555000	

C.

Organization	ABC	DEF	GHI
Telephone Number	0345678910		0333555000
Account Number	00000067678888	00000088222822	

D.

Organization	ABC	ABC	DEF	GHI
Number	0345678910	00000067678888	00000088222822	0333555000

A. Exhibit A

B. Exhibit B

C. Exhibit C

D. Exhibit D

Correct Answer: B

[C2170-051 PDF Dumps](#)

[C2170-051 Study Guide](#)

[C2170-051 Braindumps](#)