



TDA-C01^{Q&As}

Tableau Certified Data Analyst Exam

Pass Tableau TDA-C01 Exam with 100% Guarantee

Free Download Real Questions & Answers **PDF** and **VCE** file from:

<https://www.passapply.com/tda-c01.html>

100% Passing Guarantee
100% Money Back Assurance

Following Questions and Answers are all new published by Tableau
Official Exam Center

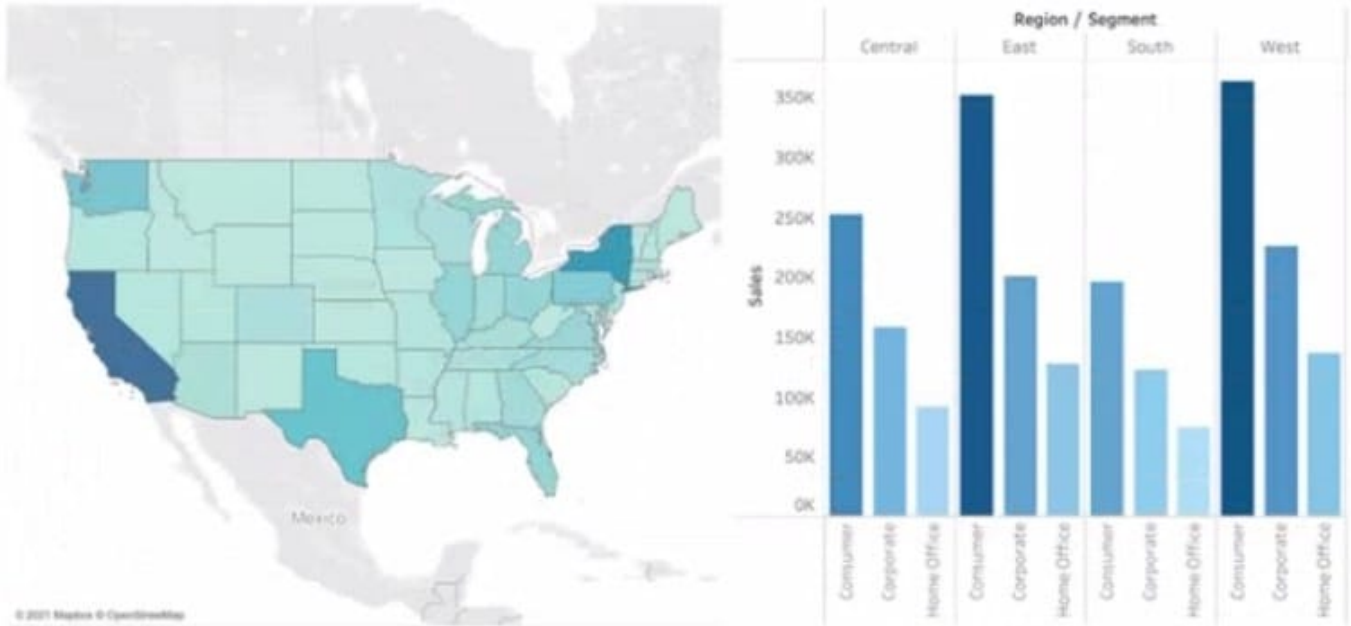
-  **Instant Download** After Purchase
-  **100% Money Back** Guarantee
-  **365 Days** Free Update
-  **800,000+** Satisfied Customers





QUESTION 1

You have the following dashboard that contains two visualizations.



You want to show only visualization at time. Users must be able to switch between visualizations. What should you use?

- A. A parameter and a calculated field
- B. Worksheet actions
- C. Show/hide buttons
- D. Dashboard actions

Correct Answer: D

QUESTION 2

You have a dataset that contains daily sales by business segment from 2017 to the present. You want to use monthly historical trends to predict sales by segment in the future.

Which three actions should you perform in order?

(Place the three correct options in order. Use the arrows to move options in Answer Area arrows to reorder the options.)

Select and Place:



Options

- From the Analytics pane, drag **Trend Line** to the worksheet.
- Add the date to the Columns shelf. Add the segment and the sales to the Rows shelf.
- Aggregate the date to month and year.
- From the Analytics pane, drag **Forecast** to the worksheet.
- Create a calculated field that uses the `MODEL_QUANTILE` function.

Answer Area

Correct Answer:



Options

From the Analytics pane, drag Trend Line to the worksheet.
From the Analytics pane, drag Forecast to the worksheet.

Answer Area

Aggregate the date to month and year.
Create a calculated field that uses the <code>MODEL_QUANTILE</code> function.
Add the date to the Columns shelf. Add the segment and the sales to the Rows shelf.

QUESTION 3


You have the following box plot that shows the distribution of average profits made in every state by region.



Columns Region

Rows AVG(Profit)

Sheet 4





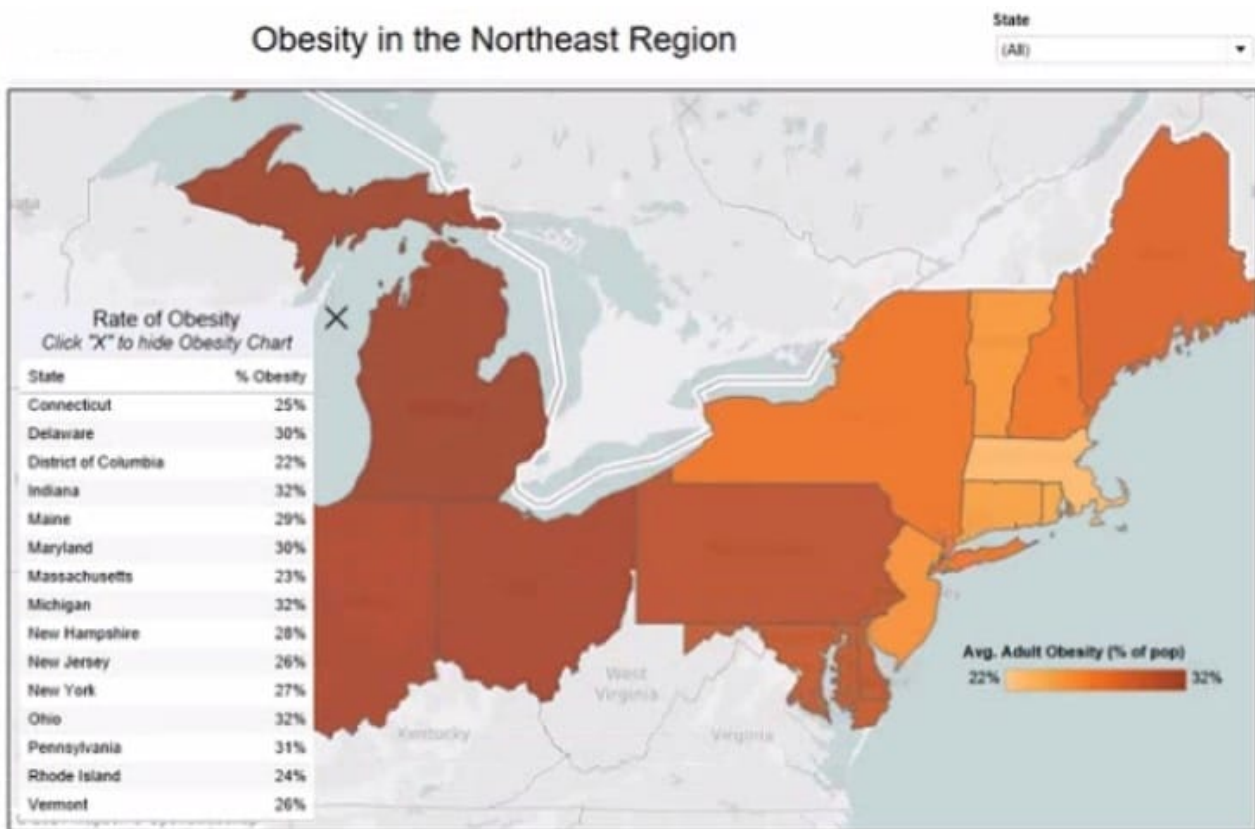
Which region has the smallest distribution of profits?

- A. South
- B. Cast
- C. Central
- D. West

Correct Answer: A

QUESTION 4

You have the Mowing dashboard.



Which two elements are floating? Choose two.

- A. The state filter
- B. The color legend
- C. The map
- D. The Rate of Obesity chart
- E. The little

Correct Answer: CD



QUESTION 5

A colleague provides you with access to a folder that contains the following files:

Sates.csv Book1.twb Sates.hyper Export.mdb

Which He contains an extract?

- A. Export mdb
- B. Book1.twb
- C. Sales.hyper
- D. Sales.csv

Correct Answer: A

[TDA-C01 Practice Test](#)

[TDA-C01 Study Guide](#)

[TDA-C01 Braindumps](#)