



# ASVAB-SECTION-9<sup>Q&As</sup>

ASVAB Section Nine : Assembling Objects

**Pass ASVAB ASVAB-SECTION-9 Exam with 100% Guarantee**

Free Download Real Questions & Answers **PDF** and **VCE** file from:

<https://www.passapply.com/asvab-section-9.html>

100% Passing Guarantee  
100% Money Back Assurance

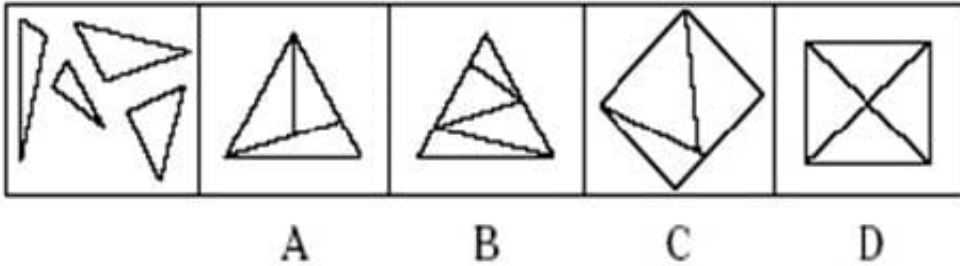
Following Questions and Answers are all new published by ASVAB  
Official Exam Center

- ⚙ **Instant Download** After Purchase
- ⚙ **100% Money Back** Guarantee
- ⚙ **365 Days** Free Update
- ⚙ **800,000+** Satisfied Customers



**QUESTION 1**

Determine which of the choices best solves the problem shown in the first picture. The problem is presented in the first drawing and the remaining four drawings are possible solutions.



A. Option A

B. Option B

C. Option C

D. Option D

Correct Answer: B


---

**QUESTION 2**

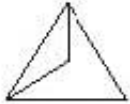
Determine which of the choices best solves the problem shown in the first picture. The problem is presented in the first drawing and the remaining four drawings are possible solutions.



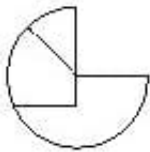
☐ (A)



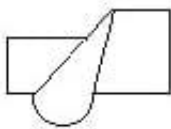
☐ (B)



☐ (C)



☐ (D)



A. Option A

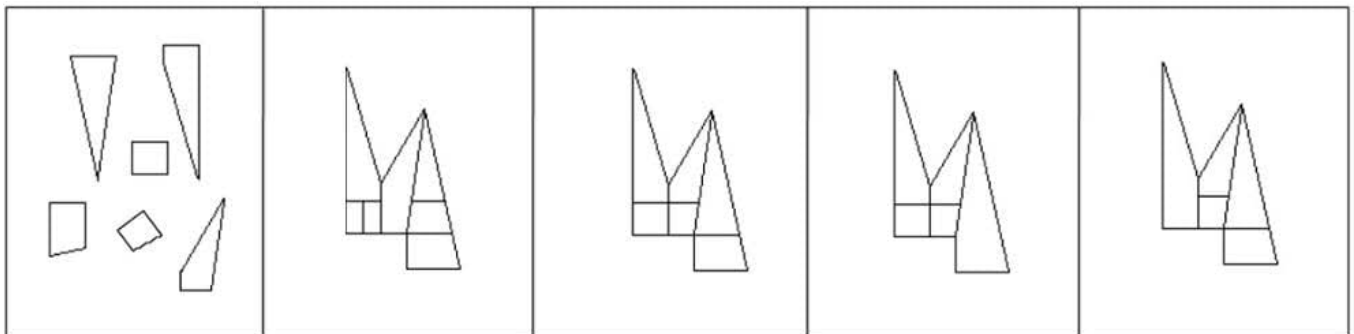
B. Option B

C. Option C

D. Option D

Correct Answer: D

### QUESTION 3



**A**

**B**

**C**

**D**

A. Option A



B. Option B

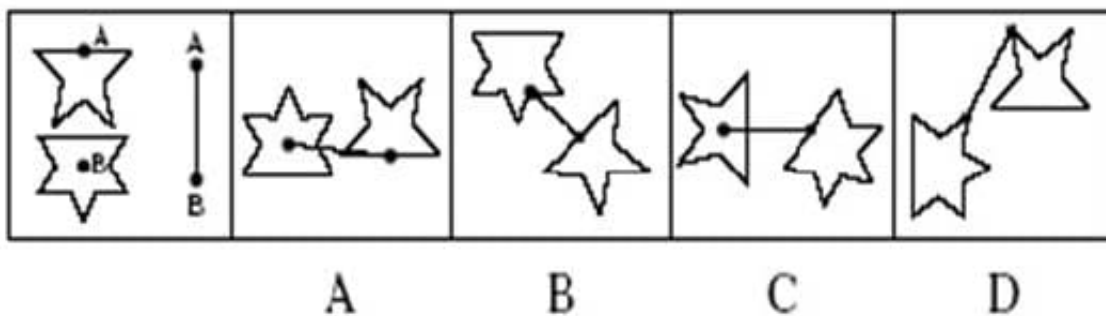
C. Option C

D. Option D

Correct Answer: B

#### QUESTION 4

Determine which of the choices best solves the problem shown in the first picture. The problem is presented in the first drawing and the remaining four drawings are possible solutions.



A. Option A

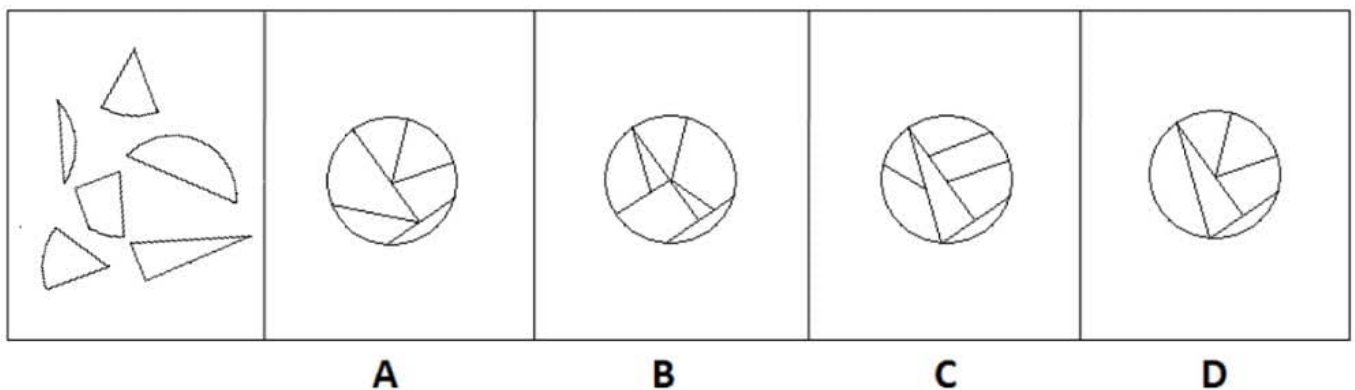
B. Option B

C. Option C

D. Option D

Correct Answer: A

#### QUESTION 5



A. Option A



B. Option B

C. Option C

D. Option D

Correct Answer: D

[ASVAB-SECTION-9 PDF  
Dumps](#)

[ASVAB-SECTION-9 VCE  
Dumps](#)

[ASVAB-SECTION-9 Exam  
Questions](#)