



OMG-OCUP-100^{Q&As}

OMG-Certified UML Professional Fundamental Exam

**Pass OMG OMG-OCUP-100 Exam with 100%
Guarantee**

Free Download Real Questions & Answers **PDF** and **VCE** file from:

<https://www.passapply.com/omg-ocup-100.html>

100% Passing Guarantee
100% Money Back Assurance

Following Questions and Answers are all new published by OMG
Official Exam Center

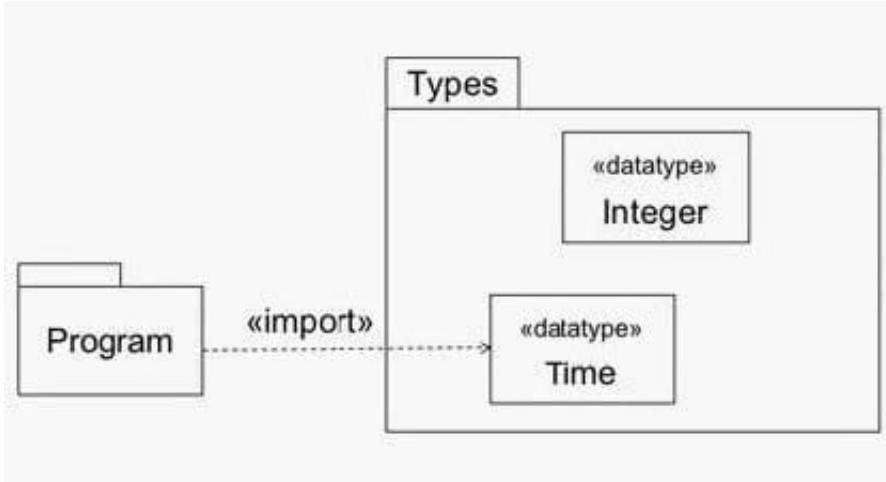
-  **Instant Download** After Purchase
-  **100% Money Back** Guarantee
-  **365 Days** Free Update
-  **800,000+** Satisfied Customers





QUESTION 1

What is the meaning of the import example in the exhibit?



- A. Program package is imported to the Time datatype.
- B. Program package is imported by the Types package.
- C. Types package is imported by the Program package.
- D. Time datatype is imported by the Program package.
- E. Time and Integer datatypes are imported by the Program package.

Correct Answer: D

QUESTION 2

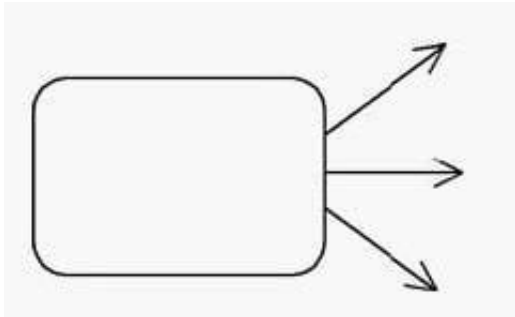
How many arrows can go out of an input parameter node?

- A. none
- B. one
- C. two
- D. any number

Correct Answer: D

QUESTION 3

How many of the three outgoing arrows from a round-cornered, solid-line rectangle (as depicted in the exhibit) will provide values at one time when the round-cornered rectangle finishes?



- A. none
- B. one
- C. two
- D. three

Correct Answer: D

QUESTION 4

What statements are true about implementation relationships? (Choose two)

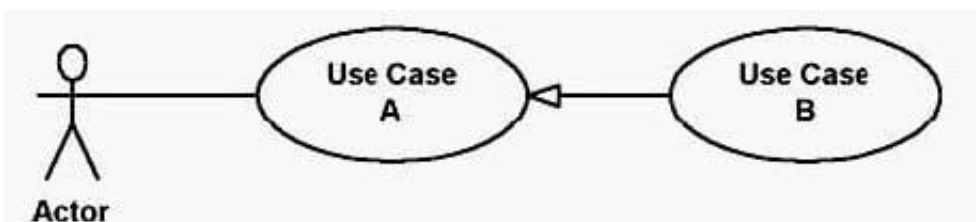
- A. A classifier may only implement one interface.
- B. An interface may implement multiple classifiers.
- C. A classifier implementing an interface conforms to its contract.
- D. The set of interfaces implemented by a classifier are its required interfaces.
- E. The set of interfaces implemented by a classifier are its provided interfaces.

Correct Answer: CE

QUESTION 5

In the exhibit, which best describes the relationship between the two use cases:

Use Case A and Use Case B?



- A. Use Case A extends Use Case B.



- B. Use Case A includes Use Case B.
- C. Use Case A generalizes Use Case B.
- D. Use Case B extends Use Case A.
- E. Use Case B includes Use Case A.
- F. Use Case B generalizes Use Case A.

Correct Answer: C

[OMG-OCUP-100 Practice Test](#)

[OMG-OCUP-100 Study Guide](#)

[OMG-OCUP-100 Braindumps](#)